



Mathematics: analysis and approaches

Standard level

Paper 2

9 May 2023

Zone A afternoon | Zone B morning | Zone C afternoon


Candidate session number

--	--	--	--	--	--	--	--	--	--	--	--	--	--	--	--	--	--	--	--

1 hour 30 minutes

Instructions to candidates

- Write your session number in the boxes above.
- Do not open this examination paper until instructed to do so.
- A graphic display calculator is required for this paper.
- Section A: answer all questions. Answers must be written within the answer boxes provided.
- Section B: answer all questions in the answer booklet provided. Fill in your session number on the front of the answer booklet, and attach it to this examination paper and your cover sheet using the tag provided.
- Unless otherwise stated in the question, all numerical answers should be given exactly or correct to three significant figures.
- A clean copy of the **mathematics: analysis and approaches formula booklet** is required for this paper.
- The maximum mark for this examination paper is **[80 marks]**.



Please **do not** write on this page.
Answers written on this page
will not be marked.

Do not write solutions on this page.

Section B

Answer **all** questions in the answer booklet provided. Please start each question on a new page.

7. [Maximum mark: 15]

Consider the function $h(x) = \sqrt{4x-2}$, for $x \geq \frac{1}{2}$.

- (a) (i) Find $h^{-1}(x)$, the inverse of $h(x)$, and state its domain.
(ii) Write down the range of $h^{-1}(x)$. [5]
- (b) The graph of h intersects the graph of h^{-1} at two points.
Find the x -coordinates of these two points. [3]
- (c) Find the area enclosed by the graph of h and the graph of h^{-1} . [2]
- (d) Find $h'(x)$. [2]
- (e) Find the value of x for which the graph of h and the graph of h^{-1} have the same gradient. [3]

Do not write solutions on this page.

Section B

Answer **all** questions in the answer booklet provided. Please start each question on a new page.

7. [Maximum mark: 15]

Consider the function $h(x) = \sqrt{4x-2}$, for $x \geq \frac{1}{2}$.

(a) (i) Find $h^{-1}(x)$, the inverse of $h(x)$, and state its domain.

(ii) Write down the range of $h^{-1}(x)$. [5]

(b) The graph of h intersects the graph of h^{-1} at two points.

Find the x -coordinates of these two points. [3]

(c) Find the area enclosed by the graph of h and the graph of h^{-1} . [2]

(d) Find $h'(x)$. [2]

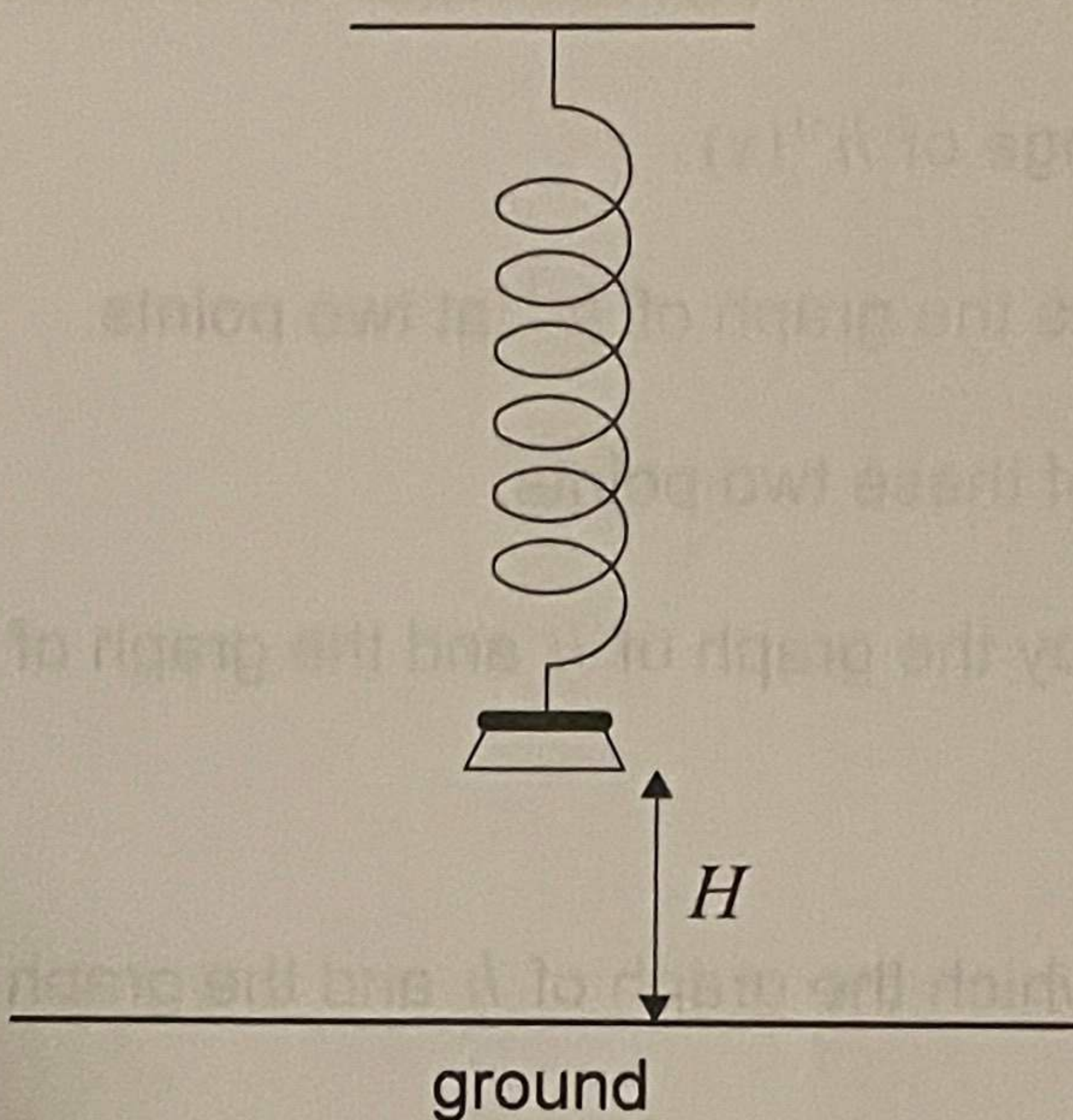
(e) Find the value of x for which the graph of h and the graph of h^{-1} have the same gradient. [3]

Do not write solutions on this page.

8. [Maximum mark: 13]

A weight suspended on a spring is pulled down and released, so that it moves up and down vertically.

The height, H metres, of the base of the weight above the ground can be modelled by the function $H(t) = a\cos(7.8t) + b$, for $a, b \in \mathbb{R}$ and $0 \leq t \leq 10$, where t is the time in seconds after the weight is released.



(a) Find the period of the function.

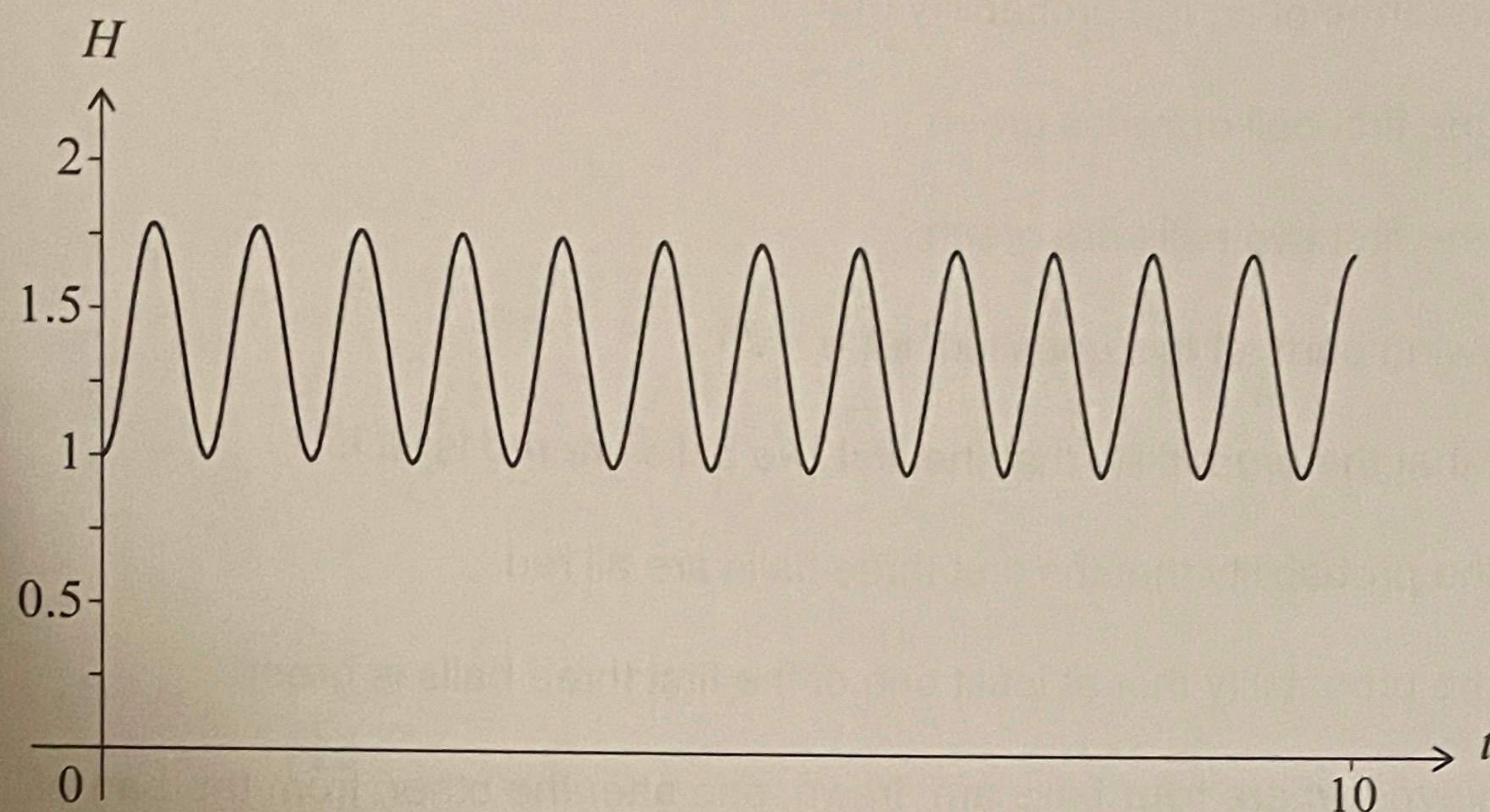
[2]

(This question continues on the following page)

Do not write solutions on this page.

(Question 8 continued)

The weight is released when its base is at a minimum height of 1 metre above the ground, and it reaches a maximum height of 1.8 metres above the ground. The graph of H is shown in the following diagram.



- (b) Find the value of
- a ;
 - b . [3]
- (c) Find the number of times that the weight reaches its maximum height in the first five seconds of its motion. [2]
- (d) Find the first time that the base of the weight reaches a height of 1.5 metres. [2]
- A camera is set to take a picture of the weight at a random time during the first five seconds of its motion.
- (e) Find the probability that the height of the base of the weight is greater than 1.5 metres at the time the picture is taken. [4]

Do not write solutions on this page.

9. [Maximum mark: 15]

A bag contains n balls. It is known that ten of the balls are green, and the rest of the balls are red. Balls are drawn from the bag, one after the other, without replacement.

- (a) Find, in terms of n , the probability that
- (i) the first ball drawn is green;
 - (ii) the first two balls are green. [3]

For the following parts of this question, let $n = 25$.

- (b) Show that the probability that the first two balls are red is 0.35. [2]
- (c) Find the probability that the first three balls are all red. [2]
- (d) Find the probability that at least one of the first three balls is green. [2]

A game is played where **four** balls are drawn, one after the other, from the bag of 25 balls, without replacement. A player earns points based on when the first green ball is drawn. At the end of each game, the four balls are put back in the bag.

A player earns zero points if no green ball is picked, or if the first green ball is picked on the first or second draw.

A player earns 10 points if the first green ball is picked on the third draw and earns 50 points if the first green ball is picked on the fourth draw.

Millie plays this game k times. She finds her score by adding together her points from each game.

- (e) Find the least value of k such that Millie's expected score is greater than 100. [6]